

Homework #6

Due: 12/5/06

1. A region of the body has a 10cm thickness of muscle with 2cm of bone imbedded as shown in Figure 1. The densities (ρ) of muscle and bone are 1.0 and 1.75 g/cm³, respectively.
 - a. Calculate the x-ray transmission along paths through muscle alone and through muscle and bone for photon energies of 30 and 100 keV using Figure 2. Assume mono-energetic beams of photons.
 - b. Determine the contrast between the background (muscle only) and muscle + bone. Which energy has the best contrast? ($C = \Delta N / \bar{N}_{background}$)
 - c. Assuming that number of photons in I_0 is inversely proportional to the photon energy and that I_0 is fixed (e.g. the total energy transmitted is the same), which energy has the best contrast to noise ratio? ($C = \Delta N / \bar{N}_{background}$)

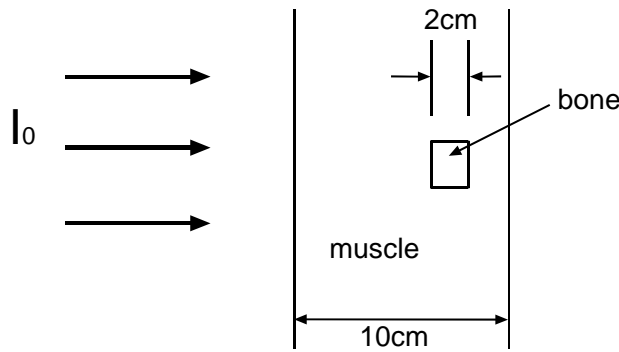


Figure 1. Object to be imaged

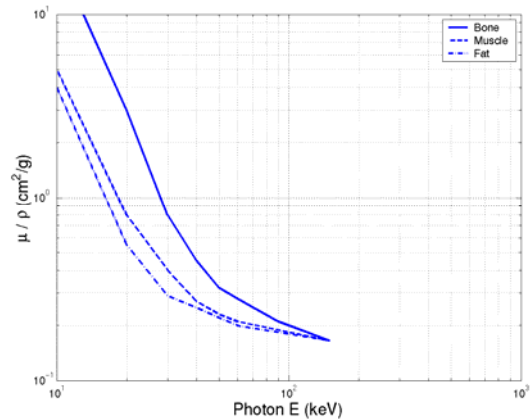
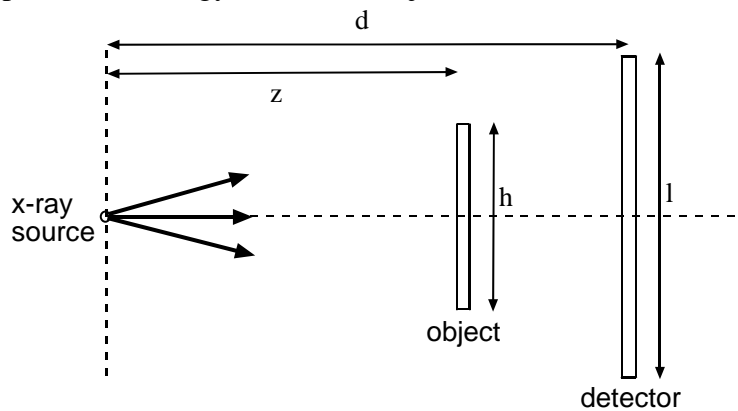


Figure 2. Mass attenuation coefficient of several tissues.

2. A source emits photons at energy E to a thin object as shown below.



- a. Find the minimum energy of a Compton-scattered photon reaching the x-ray detector assuming single scattering events.
- b. What is this energy given $E = 100\text{keV}$, $z = d/2$, $h = d/4$, $l = d/4$.

3. Projection properties:
- If the area of a function is $A = \iint f(x, y) dx dy$, find an expression for A in terms of $g_\theta(R)$.
 - Suppose the project function is separable, e.g. $g_\theta(R) = h_R(R)h_\theta(\theta)$, show that this is not a valid project unless $h_\theta(\theta)$ is a constant.
4. Suppose we have a CT system with a parallel ray source. Let's assume that the detector system contains a scintillator that disperses light to the photodetectors in roughly a Gaussian pattern. That is, we can assume that the projection detected by the computer is the ideal project convolved with a Gaussian in the form $h(R) = \exp(-\pi R^2 / W^2)$. Find the reconstructed image $\hat{f}(x, y)$ in terms of the true image $f(x, y)$.